
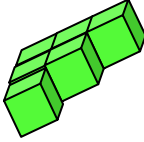
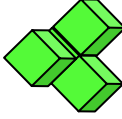

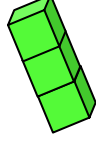
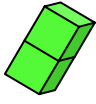
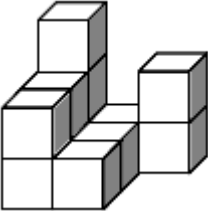
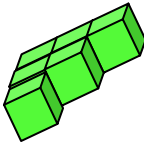
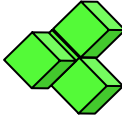

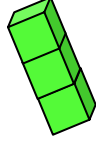
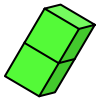
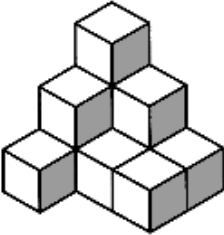
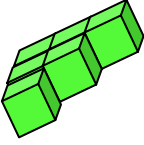
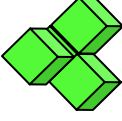

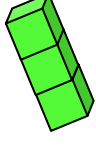
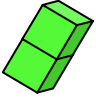
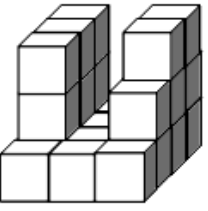
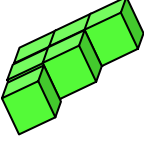
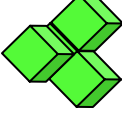

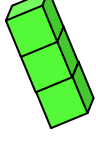
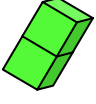
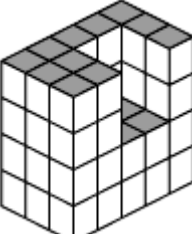
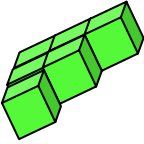
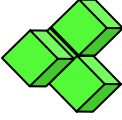

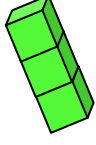
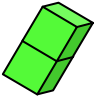


Gebäude aus Würfeln

Aufgabe: Wie viele Bauteile und Würfel wurden für diese Bauwerke gebraucht?

a) Schreibe die Anzahl der Bauteile in die Kreise der rechten Spalte!

b) Schreibe die Anzahl der Würfel in den großen Kreis in der linken Spalte!

<p>1.</p>  <div style="float: right; margin-top: 20px;">○</div>	 <div style="text-align: center; margin-top: 10px;">○</div>	 <div style="text-align: center; margin-top: 10px;">○</div>	 <div style="text-align: center; margin-top: 10px;">○</div>	 <div style="text-align: center; margin-top: 10px;">○</div>	 <div style="text-align: center; margin-top: 10px;">○</div>
<p>2.</p>  <div style="float: right; margin-top: 20px;">○</div>	 <div style="text-align: center; margin-top: 10px;">○</div>	 <div style="text-align: center; margin-top: 10px;">○</div>	 <div style="text-align: center; margin-top: 10px;">○</div>	 <div style="text-align: center; margin-top: 10px;">○</div>	 <div style="text-align: center; margin-top: 10px;">○</div>
<p>3.</p>  <div style="float: right; margin-top: 20px;">○</div>	 <div style="text-align: center; margin-top: 10px;">○</div>	 <div style="text-align: center; margin-top: 10px;">○</div>	 <div style="text-align: center; margin-top: 10px;">○</div>	 <div style="text-align: center; margin-top: 10px;">○</div>	 <div style="text-align: center; margin-top: 10px;">○</div>
<p>4.</p>  <div style="float: right; margin-top: 20px;">○</div>	 <div style="text-align: center; margin-top: 10px;">○</div>	 <div style="text-align: center; margin-top: 10px;">○</div>	 <div style="text-align: center; margin-top: 10px;">○</div>	 <div style="text-align: center; margin-top: 10px;">○</div>	 <div style="text-align: center; margin-top: 10px;">○</div>
<p>5.</p>  <div style="float: right; margin-top: 20px;">○</div>	 <div style="text-align: center; margin-top: 10px;">○</div>	 <div style="text-align: center; margin-top: 10px;">○</div>	 <div style="text-align: center; margin-top: 10px;">○</div>	 <div style="text-align: center; margin-top: 10px;">○</div>	 <div style="text-align: center; margin-top: 10px;">○</div>

Für die Anzahl der Bauteile in der rechten Spalte gibt es jeweils mehrere richtige Lösungen!